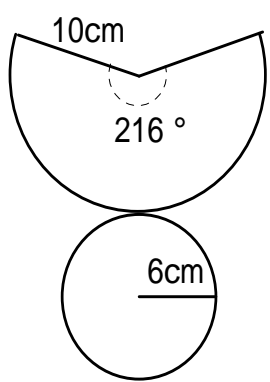
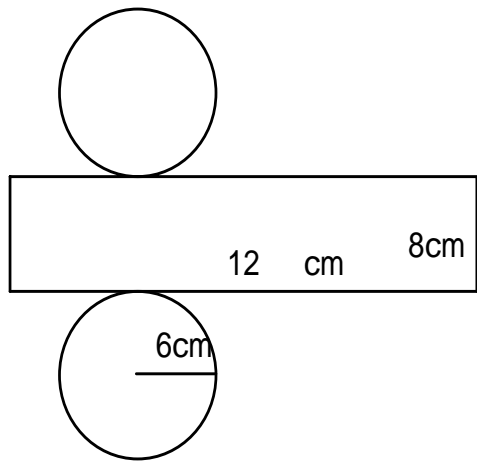



Compare the size of cone-shaped paper patterns and cylinder-shaped paper patterns

First Grade	Class	No.	Name:
-------------	-------	-----	-------

[Task] When containers A and B are created, which can be created with the smaller paper pattern?

Waste can be reduced if they can be created with minimum materials...



Think about how to obtain the surface areas by referring to these figures.